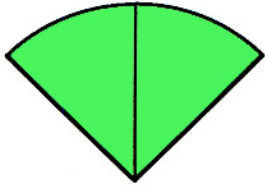



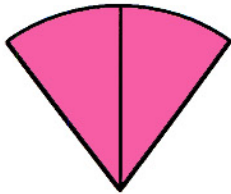
Equivalent Fractions




$$\frac{2}{8}$$



$$\frac{1}{4}$$



$$\frac{2}{10}$$



$$\frac{1}{5}$$